

PART I – Short Answer Questions

40 Marks

1. Tick (✓) the box for the correct answer.

	2
--	---

A. Activity that takes LESS TIME



Dancing

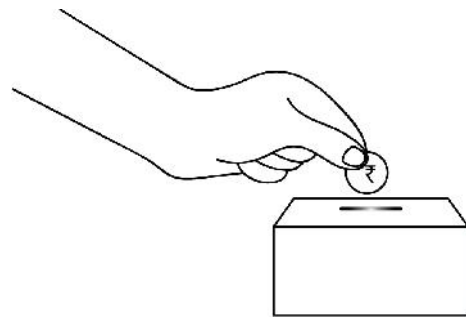


Kicking a ball

B. Activity that takes MORE TIME



Cooking

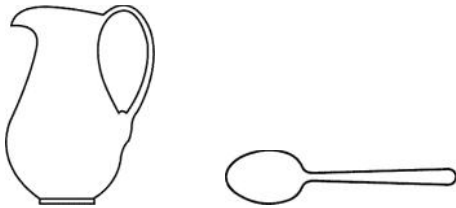


Putting a coin in the money box


2. **Circle** the container that can hold MORE water.

	3
--	---

A.



B.



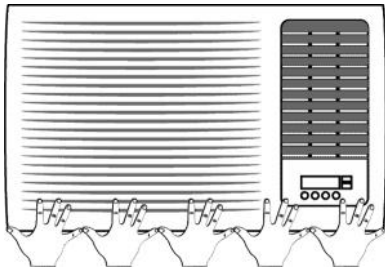
3. Match each object with the correct length.

	3
--	---

Object

Length

A.

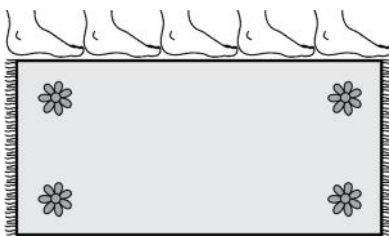


•

•

5 digits

B.

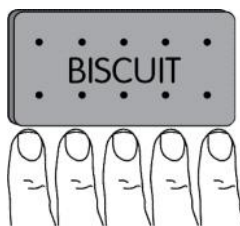


•

•

5 handspans

C.



•

•

5 footspans

4. Write the value of each note and coin.

	3
--	---

A.



B.



C.

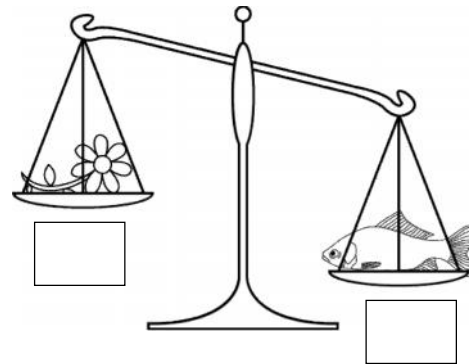
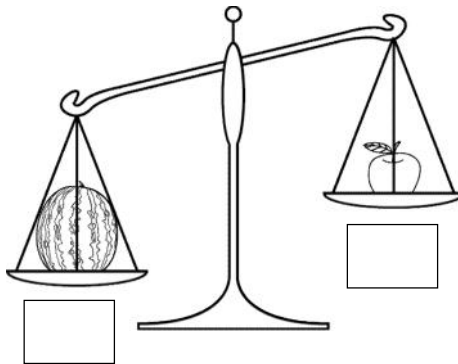


5. Tick (✓) the correct thing.

	3
--	---

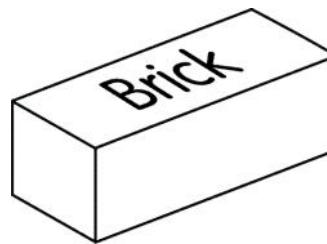
A. The LIGHTER thing

B. The HEAVIER thing



6. Look at the shape. Choose the correct answer and fill in the blanks.

	2
--	---



A. The brick will _____ (slide/roll) on being pushed.

B. The brick has _____ (flat/round) sides.

7. Fill in the missing numbers.

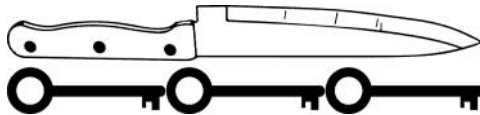
4

1	2	3	4	5	6	7	8	9	10
11	12	13	14	15	16	17	18	19	20
21	22	23		25	26	27	28	29	30
31	32	33	34	35	36	37	38	39	40
41	42	43	44	45	46	47	48	49	50
51	52	53	54	55	56	57	58	59	
61	62	63	64	65	66	67	68	69	70
	72	73	74	75	76	77	78	79	80
81	82	83	84	85	86	87	88	89	90
91	92	93	94	95	96	97	98	99	

8. Write the length of each object.

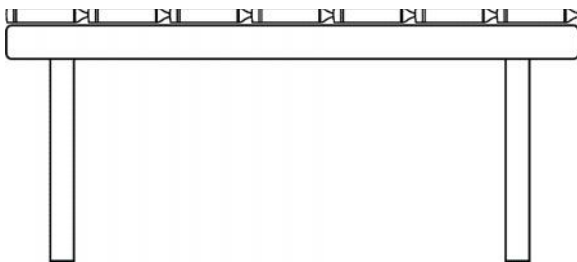
3

A.



Length of the knife = _____ keys

B.



Length of the table = _____ crayons

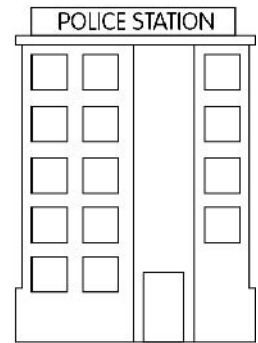
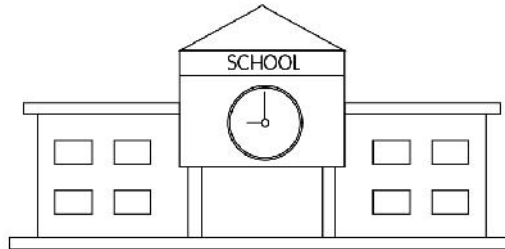

C.



Length of the shoe = _____ paper clips

9. Look at the picture. Complete the sentences.

3



A. The _____ is the SHORTEST building.

B. The _____ is taller than the police station.

C. The _____ is the TALLEST building.

10. Choose the correct shape and write the answer.

3

A. I have 3 sides. I have 3 corners.


I am a _____ (square/triangle).

B. I have 4 sides. I have 4 corners.

I am a _____ (rectangle/circle).

11. Write the missing days of the week.

4



12. Write the missing numbers.

4




13. Look at the notes and coins. Write the total value.

3






14. Look at the picture. Do as instructed.

	5
--	---



A. Count the fruits. Complete the table.

Fruit	Number of fruits
 Strawberry	
 Apple	
 Pineapple	

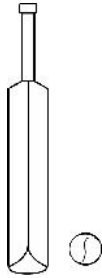
B. The number of _____ (strawberries/apples) is the maximum.

C. The number of _____ (apples/pineapples) is the minimum.

15. Do as instructed.

A. Look at the pictures. Choose the correct word and fill in the blanks.

a.




The bat is to the _____ (right/left) of the ball.

b.



The balloon is _____ (above/under) the girl.

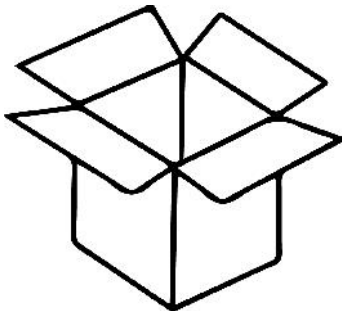
c.




The popcorn is _____ (on/under) table.

B. Draw:

a. A pencil OUTSIDE the box

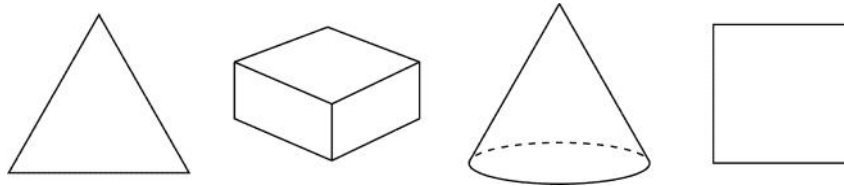


b. A ball UNDER the chair



16. Look at the shapes. Do as instructed.

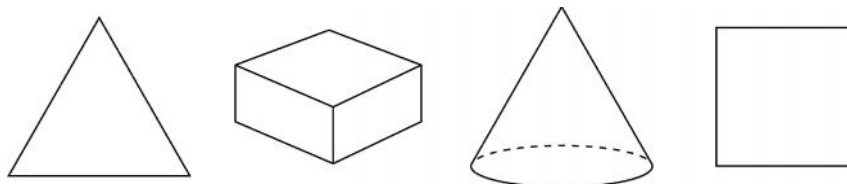
A. a. Tick (✓) any 1 FLAT shape.



b. Write the name of this flat shape.

c. Write 1 feature of this shape.

B. a. Tick (✓) any 1 SOLID shape.

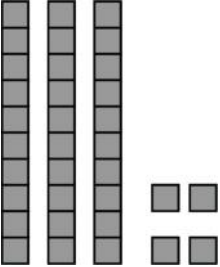
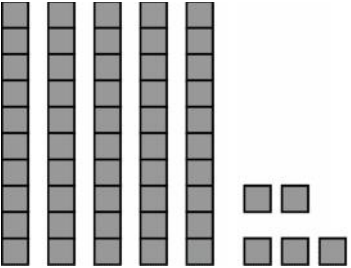


b. Write the name of this solid shape.

c. Write 1 feature of this shape.

17. Complete the table.



7

Place value blocks	Tens and ones	Number	Number name
<p>A.</p> 	<p>_____ tens _____ ones</p>		
<p>B.</p> 	<p>_____ tens _____ ones</p>		


18. Do as instructed.

8

A. Tick (✓) the picture that shows a pattern.

<p>Picture 1</p> <input type="checkbox"/>	
<p>Picture 2</p> <input type="checkbox"/>	

B. Complete the pattern.



C. Complete the number pattern.

a. 12, 14, 16, 18, _____, _____

b. 30, 40, 50, 60, _____, _____